

**Circle the correct answer.**

1. A left turn on a red light is:
- A. Never allowed in Minnesota.
  - B. Allowed only when facing a red arrow.  
Allowed only when turning from a one-way
  - C. street onto another one-way street.




- D. street onto a one-way street.

- 
2. This sign means:
- You may turn left from either traffic lane at
  - A. the intersection ahead.
  - B. You must turn left at the intersection ahead.  
You may proceed straight ahead from either
  - C. traffic lane at the intersection ahead.



- D. left lane at this intersection.

- 
3. This sign means:
- A sharp change in the direction of the road
  - A. ahead.
  - B. Slow moving vehicle.
  - C. Right turn only at the intersection ahead.



D. You must merge soon.

---

Unless different limits are posted, the speed  
4. limit for urban (residential) areas is:

- A. 20 MPH
- B. 35 MPH
- C. 30 MPH



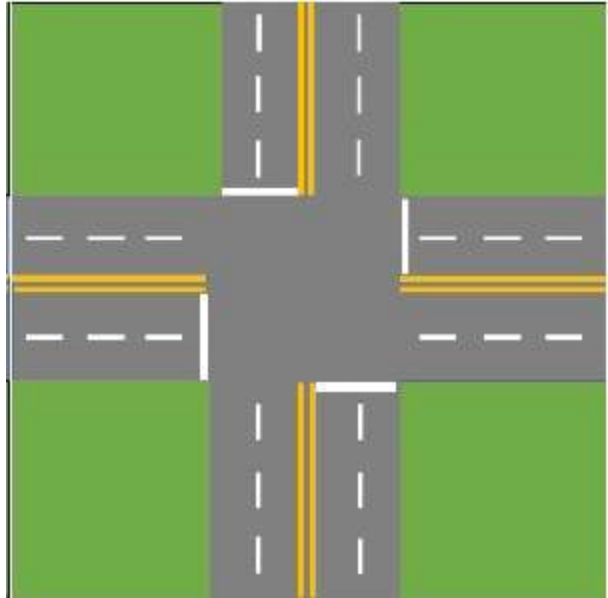
D. 25 MPH

---

When you make a left turn onto a two-way  
5. street, which lane should you enter?

- A. The first lane to the left of the centerline.
- B. The second lane to the right of the centerline.

- C. The first lane available to the right of the centerline.



It doesn't matter as long as you don't interfere  
D. with other traffic.

6.

According to Minnesota's Speed Laws:

A. You should drive at the same speed as the other vehicles.

You should drive at a speed no faster than is reasonable

B. under existing weather and road conditions.

C. You must drive the posted speed limit at all times.



D. You won't be ticketed driving the posted speed limit.

---

7. What should you do when another vehicle is trying to pass you on a two lane roadway?

A. Attempt to change to a different lane.

B. Stay in your lane and do not increase your speed.

C. Flash your brakelights.



D. Stay in your lane and increase speed slightly.

8.

“Zipper Merge” benefits drivers by:

- A. Increasing road rage
- B. Creating a sense of fairness and equity.
- C. Increasing traffic backups



Increasing the difference in speeds between the lanes of  
D. traffic

9. When passing a bicyclist the minimum distance you must  
keep between your vehicle and the bicycle is:

- A. 6 feet.
- B. 3 feet.
- C. None is required.



D. As much space as a car.

---

10 When an emergency vehicle (such as police or ambulance)

. is stopped on the right side of a multi-lane road:

A. You should alert other drivers by using your horn.

B. You are required to stop on the side of the road.

C. You should maintain your lane position and speed up.



You should safely move to the lane furthest away from the  
D. emergency vehicle.

11.

This symbol means:

That you must take the course of action

A. indicated by the sign.

You may disregard this sign if there is no other

B. traffic around.

That you can take a certain course of action

C. only if there is no other traffic around.

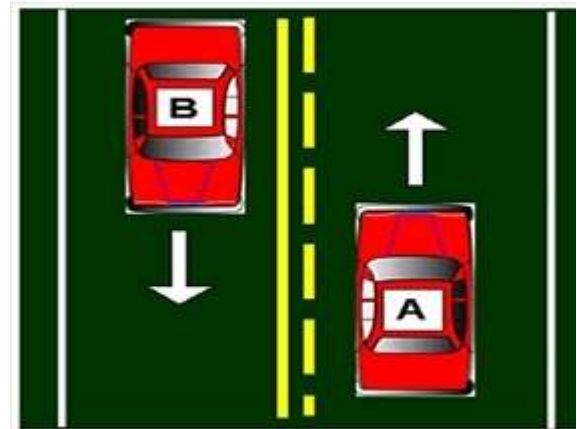


You should not take a certain course of action  
D. indicated by the sign.

---

12. According to the lane markings in this diagram, which statement is true?

- A. Vehicle A may pass.
- B. Neither vehicle A or B may pass.
- C. Both vehicles A and B may pass.



D. Vehicle B may pass.

---

13.

This sign means:

Merging traffic, drivers in the right lane must

- A. merge left.  
Driver in right lane must exit at the next
- B. intersection.
- C. Added lane, traffic may enter but merging is not necessary.



D. Right lane ends, merge left.

---

14.

What does this sign mean?

Any vehicle carrying a person who is physically

- A. disabled may park in this space.
- B. Only persons using wheelchairs may park in this space.
- C. If all other parking spaces are taken, you may park in this space.



Only vehicles with physically disabled license

- D. plates or parking certificates may park here.
- 

15. Texting while driving is legal while stopped at a traffic light

- A. True.



B. False.

---

16.

A traffic light that is flashing red means

- A. Proceed to the right.
- B. Caution.
- C. Stop.



D. Yield.

17.

Solid white lines on a road are meant to:

- A. Not allow pedestrians to cross at that location.
- B. Separate traffic moving in opposite directions.  
Encourage movement between lanes of traffic
- C. traveling in the same direction.





D. Discourage lane changing.

---

18.

A flashing yellow left turn arrow means:

- A. No left turn
- Yield the right of way to oncoming traffic before
- B. turning.



C. Wait till the arrow turns green to turn

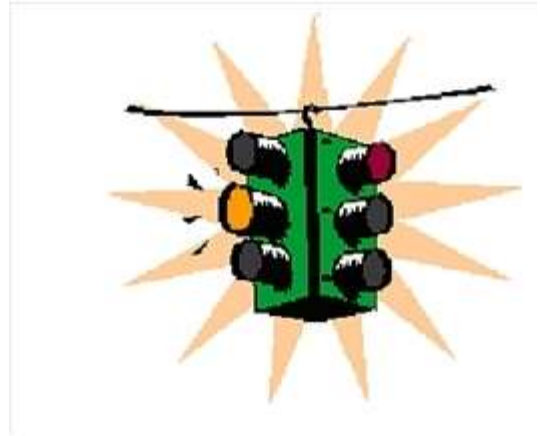
---

19.

A flashing yellow light means:

You do not have to look for traffic at the

- A. intersection ahead.
- B. You should speed-up for the intersection ahead.
- C. Proceed through the intersection with caution.




D. You must stop at the intersection ahead.

---

This emblem is displayed on the rear of vehicles  
20. that are designed to travel less than \_\_\_\_ miles per hour.

- A. 30 mph
- B. 10 mph
- C. 50 mph



D. 20 mph

---

21.

This sign means:

You may pass only when the vehicle ahead of you

- A. is going slower than the speed limit.
- B. Beginning of a No Passing zone.
- C. End of a No Passing zone.



D. No passing at night only.

22.

A green road sign:

- A. Is a warning sign for motorists.
- B. Warns drivers in construction zones.
- C. Guides and informs motorists.



D. Prohibits and commands the driver.

23

. This sign means:

- A. The divided highway ends.
- B. Lane ends, merge right.
- C. Divided highway begins, stay to the right.



D. You are entering a two-way roadway.

---

24

. A person will violate the Minnesota Open Bottle Law if:

A. They carry a bottle of wine in the trunk.

The law does not apply to anyone possessing a Commercial

B. Driver's License.

They have an open container of alcohol in the passenger area of

C. the vehicle.



D. The law only applies to vehicles on interstates.

---

25

. What does this sign mean?

Be prepared to accelerate if a train is approaching the crossing

A. ahead.

This sign warns of a railroad crossing ahead. Slow down and

B. look carefully for trains.





C. keep your wheels straight while waiting to turn.

---

28 Which of the following statements is true about wearing safety belts?

- A. wear the lap belt.
- B. NOT wear a safety belt.
- C. be seriously injured by it in a crash.



Children under the age of four may use adult safety belts if they weigh more than 45 pounds.

---

29

- . When you are facing this sign, all vehicles must yield to you.
- A. False.



B. True.

30 The only time you are NOT required to stop when approaching a school bus with flashing red lights on and stop arm extended is:

When you approach it from the front on the opposite side of a separated roadway.

A. separated roadway.

B. When you are driving on a one-way street.

C. When passing on the right side of the bus.



When there is more than one lane of traffic traveling in the same direction.

---

31

Carbon monoxide can render you unconscious in just.

A. One hour

B. Two hours

C. One and a half hours



D. A few minutes

---

32 When entering a public road from an alley or parking lot you must:

- A. Slow down and look carefully.
- B. Stop for traffic only.
- C. Stop for pedestrians only.



D. Stop before entering the roadway.

---

33

- . When driving through a highway work zone, you must:
- A. All of these answers are correct.
  - B. reduce your speed to the posted work zone speed limit.
  - C. watch out for workers and equipment.





D. follow the flag person's directions, if one is present.

---

34

- . When safe to do so, a motor vehicle driver should:
  - A. Drive in a bicycle lane.
  - B. Pass close to bicyclists in a bicycle lane.
  - C. Move into a bicycle lane only to prepare for a turn.



D. Not move into a bicycle lane to prepare for a turn.

---

35


- . Driving in Minnesota is:
  - A. A right of all U.S. Citizens.
  - B. A right of all Minnesota residents.
  - C. Not permitted unless you have a Minnesota Identification Card.



D. A privilege that can be taken away if you abuse it.

36

- . When two vehicles approach an uncontrolled "T" intersection:
  - A. The vehicle that is turning must yield to all cross traffic.
  - B. The vehicle going straight must yield to the vehicle turning.
  - C. All vehicles must stop before continuing on.



D. A turn signal is not required.

---

37 If you are traveling slower than the traffic around you on a multi-

- . lane roadway, you should:
  - A. Not change lanes.
  - B. Drive in the right-hand lane.
  - C. Drive in the left-hand lane.



D. Drive in the middle lane.

---

38

- . When driving through a highway work zone, you should:
  - A. Drive slowly with your 4-way flashers on.
  - B. Reduce your speed and adjust lane position away from workers.
  - C. Maintain speed.



D. Maintain lane position.

---

39 If you see in your rear-view mirror that the vehicle behind you is

- . following too closely, you should:
  - A. Pump your brakes.
  - B. Slow down slightly and allow the vehicle to pass.
  - C. Hit the brakes hard to force them to back off.



Wave the driver around you when you feel it's safe for them to  
D. pass.

- 
- 40 When encountering a transit bus attempting to merge from a bus  
stop or shoulder, a driver in the right traffic lane must:
- A. Yield the right of way to the bus.
  - B. Flash your headlights.
  - C. Drive faster to get around the bus.



D. Continue in your lane, the bus must yield to you.