



## NTW Checklist Lesson 6

1.

While Johnny was waiting to turn, he needs to:

- A. apply his brakes while making the turn.
- B. signal at least 50 feet before the turn.



C. keep his wheels straight while waiting to turn.

---

2. Bob must stop must stop at least \_\_\_ feet away from a school bus stopped with its flashing red lights on and stop arm out?

- A. 50 feet
- B. 75 feet
- C. 30 feet



D. 20 feet

---

3. When Jake sees an emergency vehicle stopped on the right side of a multi-lane road he must:

Safely move to the lane furthest away from the emergency

- A. vehicle.
- B. Alert other drivers by using your horn.
- C. Stop on the side of the road.



D. Maintain your lane position and speed up.

---

4. Nevin is wearing his safety belt like he should, what statement below is correct?

Pregnant women should not wear the lap belt because they

- A. may be seriously injured by it in a crash.
- Children under the age of four may use adult safety belts if
- B. they weigh more than 45 pounds.

Your chances of being killed or injured are greater if you DO  
C. NOT wear a safety belt.



In vehicles with an automatic shoulder belt it is not necessary  
D. to wear the lap belt.

- 
5. Sally is passing a bicyclist, what is the minimum distance she need to be away from the cyclist?
- A. None is required.
  - B. As much space as a car.
  - C. 6 feet.



D. 3 feet.

- 
6. Karill is confused about this sign, what does it mean?
- A. You are entering a two-way roadway.
  - B. Lane ends, merge right.
  - C. The divided highway ends.



D. Divided highway begins, stay to the right.

Ryan is driving behind this tractor and is getting frustrated. But Susan says  
7. relax, it is a slow moving vehicle designed to travel less than \_\_\_\_ miles per hour.

- A. 50 mph
- B. 30 mph
- C. 20 mph



D. 10 mph

---

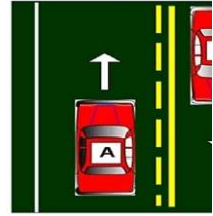
8.

Zach made this diagram in advisory today, which statement is true?

A. Both vehicles A and B may pass.

B. Vehicle B may pass.

C. Vehicle A may pass.



D. Neither vehicle A or B may pass.

---

Jerry was talking about DUI's in MN to a colleague from another state and

9. Jerry said you may lose your driving privileges if convicted of driving a

\_\_\_\_\_ while under the influence of drugs or alcohol.

A. Car

B. Boat



C. all of these answers are correct.

---

10. Joey was wondering when is it legal to send or receive an electronic message  
with a cell phone?

A. In low traffic areas

B. When stopped at a traffic light



C. To obtain emergency assistance

---

11. Jocelyn is facing this sign and thinks everybody MUST yield to her. Is she

right? T/F

A. False.



B. True.

---

12

. Biff comes up to a flashing yellow left turn light what does it mean?

A. Yield the right of way to oncoming traffic before turning.

B. No left turn



C. Wait till the arrow turns green to turn

Susan comes up to a traffic light that is flashing red, what should she do?

- 13. A. Proceed to the right.
- B. Yield.
- C. Caution.
- D. Stop.



Bart sees this sign on the side of the road and gets nervous, what does it mean?

- 14. A. This sign means that all vehicles are required to stop at the railroad crossing ahead.
- B. Be prepared to accelerate if a train is approaching the crossing ahead.
- C. This sign warns of a railroad crossing ahead. Slow down and look carefully for trains.



Reggie was driving to his job site and saw this sign approaching. Huh, what does it mean?

- 15. A. Divided highway ends.
- B. Lane ends, merge right
- C. Lane ends, merge left.
- D. Narrow lanes ahead.



Portia was driving in her chevette and saw this sign, what is this green sign?

- 16. A. Warns drivers in construction zones.
- B. Prohibits and commands the driver.
- C. Guides and informs motorists.
- D. Is a warning sign for motorists.



This sign confused Rocky, what does it mean?

- 17. A. Driver in right lane must exit at the next intersection.
- B. Right lane ends, merge left.
- C. Merging traffic, drivers in the right lane must merge left.
- D. Added lane, traffic may enter but merging is not necessary.



Morgan is driving her fiat and sees this sign and is confused.

- 18. A. Cross traffic at the intersection ahead must yield to you.

- B. Railroad crossing ahead.  
Watch carefully at the intersection ahead, you may need to
- C. yield.



- D. All traffic must stop at the intersection ahead.
- 19 Ronnie is getting passed by another vehicle on a 2 lane roadway,  
. what should he do?
- A. Attempt to change to a different lane.  
B. Stay in your lane and increase speed slightly.  
C. Stay in your lane and do not increase your speed.



- D. Flash your brake lights.

- 
- 20 Rochelle is coming up on an intersection and the turn arrow is  
. red. What should she do?
- A. You must yield to oncoming traffic before turning left.  
B. Oncoming traffic must yield to you.  
C. You must wait for a green arrow before turning left.



- D. You must make a complete stop before turning left.

- 
- 21 Could you educate Rufus on following parking question? When  
. parking is NOT allowed?
- A. All of these answers are correct.  
B. Beside a yellow painted curb.



- C. Within 10 feet of a fire hydrant.
-

Glenda and her dog Judge are driving through an urban  
22(residential) neighborhood that has no regulated speed limit  
signs. What would the speed limit be?

- A. 35 MPH
- B. 25 MPH
- C. 20 MPH



D. 30 MPH

---

Butch needs a cup of coffee quick and sees one spot in front of  
23the coffee shop. But there is this blue and white sign there.

. What does this sign mean?

A. If all other parking spaces are taken, you may park in this space.

Only vehicles with physically disabled license plates or parking  
B. certificates may park here.

Any vehicle carrying a person who is physically disabled may  
C. park in this space.



D. Only persons using wheelchairs may park in this space.

---

24

. Rocko was changing lanes, what must he do?

A. Slow your speed below the speed of the other traffic.

Signal and check only your mirror in the direction you are  
B. moving.

Signal, check mirrors, and turn your head in the direction you are  
C. moving to check your "blind spot".





Turn your head in both directions to check both your left and right "blind spots".

25 My science teacher told me to reduce the risk of carbon monoxide poisoning and possibly death.

Make sure your vehicle's exhaust system does not leak or is blocked.

A. All of these answers are correct.

Avoid sitting in a vehicle with the engine idling and the windows tightly closed.



Avoid idling a vehicle in a garage even with the garage door open.

---

26

Ricky is driving and wonders what this sign means?

A. Be prepared to turn left at the intersection ahead.

B. Yield to pedestrians in the crosswalk ahead.

C. A school crossing flag person is ahead.



D. Drive cautiously, a construction flag person is ahead.

---

27 Bobo is wondering what a good safe practice when driving  
· a car that is equipped with an airbag?

Children should ride in the front seat where the driver can

A. see them.

B. It is not necessary to wear safety belts.

Try to have a least ten (10) inches of space between the

C. driver and the steering wheel.



D. Hold the steering wheel at the 10 and 2 o'clock position.

---

28 Bobbie is driving on 394 and is wondering what the solid  
· white lines on the road are there for? Please answer her....

A. Discourage lane changing.

Encourage movement between lanes of traffic traveling in

B. the same direction.

C. Not allow pedestrians to cross at that location.

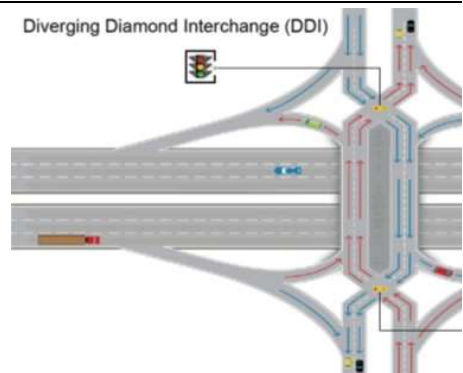




D. Separate traffic moving in opposite directions.

As I am driving into the city of Dallas, I come upon this crazy looking interchange, what are the safety benefits of this system?

- A. Wrong way entry to ramps is easier.
- B. Pedestrian crossings are longer.
- C. Fewer conflict points.



D. Limited sight distance at turns.

I got stopped by Wayzata's finest and the police officer said I need to carry the proper insurance coverage with me. Is he right? T/F

- A. True.

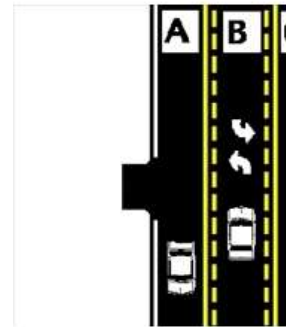


B. False.

31

JJ is making a left turn, what lane must he be in?

- A. Lane C
- B. Lane A
- C. Any of these lanes.



D. Lane B

32 Harley is riding his motorcycle. Because his motorcycle is smaller than a car:

- A. Motorcycles always have the right of way.
- B. They may share the same lane with cars.

It can be difficult to judge the speed, and distance of an approaching motorcycle.



D. They may drive on the shoulder during rush hours.

33

Which of the following statements is true about railroad crossings?

Certain buses and trucks are required to stop at all railroad crossings. Do not cross the center of the road to pass.

Vehicle/train collisions almost always occur when the driver is in an unfamiliar area.

Trains slow down when they approach a railroad crossing, so a car can usually make it across ahead of the train.



D. You may drive under a gate that is being lowered.

34

Boris is driving his Big Rig, because of its size, it:

- A. All of these answers are correct.
- B. takes longer to pass than a car.
- C. has blind spots to the front, sides, and rear of the vehicle.



D. appears to be traveling at a slower speed than it really is.

35 Tommy encountered a transit bus attempting to merge from a bus stop or shoulder, he's in the right traffic lane what should he do? d

- A. Flash his headlights over and over.
- B. Continue in his lane, the bus must yield to him.
- C. Drive faster to get around the bus.



D. Yield the right of way to the bus.

36 Jake just got a really important text message, and can he stop or park on an interstate highway?

- A. Is allowed, except on bridges.
- B. Is prohibited only if "No Parking" signs are posted.
- C. Is illegal, except in an emergency.



D. Is allowed during daylight hours only.

---

37 I am a tax paying, law abiding Minnesotan, and it is my right to drive in MN! Am I right or wrong explain?

- A. No, driving is a privilege that can be taken away if you abuse it.
- B. Yes your are it is a right of all Minnesota residents.
- C. A right of all U.S. Citizens.



D. Not permitted unless you also have a Minnesota Identification Card.

---

38 Aiden is preparing to make a right turn. According to the caption to the right, how should he do it?

- A. Not move into a bicycle lane to prepare for a turn.
- B. Move into a bicycle lane only to prepare for a turn.
- C. Pass close to bicyclists in a bicycle lane.



D. Drive in a bicycle lane.

---

39 In a driving emergency, immediately slamming on the brakes may NOT be the best or safest action to take.

A. True.



B. False.

---

40 Wade is driving on a freeway, an emergency vehicle approaches him from behind with red lights flashing and siren sounding, what should he do?

A. Stop in the lane you are in.

B. Move to the closest side of the road and stop.

C. Swerve into another lane quickly.



D. Move to the right-hand lane no matter what lane you are currently using.